

© International Baccalaureate Organization 2021

All rights reserved. No part of this product may be reproduced in any form or by any electronic or mechanical means, including information storage and retrieval systems, without the prior written permission from the IB. Additionally, the license tied with this product prohibits use of any selected files or extracts from this product. Use by third parties, including but not limited to publishers, private teachers, tutoring or study services, preparatory schools, vendors operating curriculum mapping services or teacher resource digital platforms and app developers, whether fee-covered or not, is prohibited and is a criminal offense.

More information on how to request written permission in the form of a license can be obtained from <https://ibo.org/become-an-ib-school/ib-publishing/licensing/applying-for-a-license/>.

© Organisation du Baccalauréat International 2021

Tous droits réservés. Aucune partie de ce produit ne peut être reproduite sous quelque forme ni par quelque moyen que ce soit, électronique ou mécanique, y compris des systèmes de stockage et de récupération d'informations, sans l'autorisation écrite préalable de l'IB. De plus, la licence associée à ce produit interdit toute utilisation de tout fichier ou extrait sélectionné dans ce produit. L'utilisation par des tiers, y compris, sans toutefois s'y limiter, des éditeurs, des professeurs particuliers, des services de tutorat ou d'aide aux études, des établissements de préparation à l'enseignement supérieur, des fournisseurs de services de planification des programmes d'études, des gestionnaires de plateformes pédagogiques en ligne, et des développeurs d'applications, moyennant paiement ou non, est interdite et constitue une infraction pénale.

Pour plus d'informations sur la procédure à suivre pour obtenir une autorisation écrite sous la forme d'une licence, rendez-vous à l'adresse <https://ibo.org/become-an-ib-school/ib-publishing/licensing/applying-for-a-license/>.

© Organización del Bachillerato Internacional, 2021

Todos los derechos reservados. No se podrá reproducir ninguna parte de este producto de ninguna forma ni por ningún medio electrónico o mecánico, incluidos los sistemas de almacenamiento y recuperación de información, sin la previa autorización por escrito del IB. Además, la licencia vinculada a este producto prohíbe el uso de todo archivo o fragmento seleccionado de este producto. El uso por parte de terceros —lo que incluye, a título enunciativo, editoriales, profesores particulares, servicios de apoyo académico o ayuda para el estudio, colegios preparatorios, desarrolladores de aplicaciones y entidades que presten servicios de planificación curricular u ofrezcan recursos para docentes mediante plataformas digitales—, ya sea incluido en tasas o no, está prohibido y constituye un delito.

En este enlace encontrará más información sobre cómo solicitar una autorización por escrito en forma de licencia: <https://ibo.org/become-an-ib-school/ib-publishing/licensing/applying-for-a-license/>.

Design technology
Higher level
Paper 3

Wednesday 10 November 2021 (afternoon)

Candidate session number

--	--	--	--	--	--	--	--	--	--

1 hour 30 minutes

Instructions to candidates

- Write your session number in the boxes above.
- Do not open this examination paper until instructed to do so.
- Answer all of the questions.
- Answers must be written within the answer boxes provided.
- A calculator is required for this paper.
- The maximum mark for this examination paper is **[40 marks]**.



Section A

Answer **all** questions. Answers must be written within the answer boxes provided.

1. Smart's Shoes is a company that designs and manufactures comfortable and functional shoes, see **Figure 1**.

Smart's Shoes aims to develop sustainable processes and practices in the design and manufacture of their products.

Each year Smart's Shoes publishes a sustainability report. The infographic in **Figure 2** shows an overview of that report.

Figure 1: Smart's Shoes products



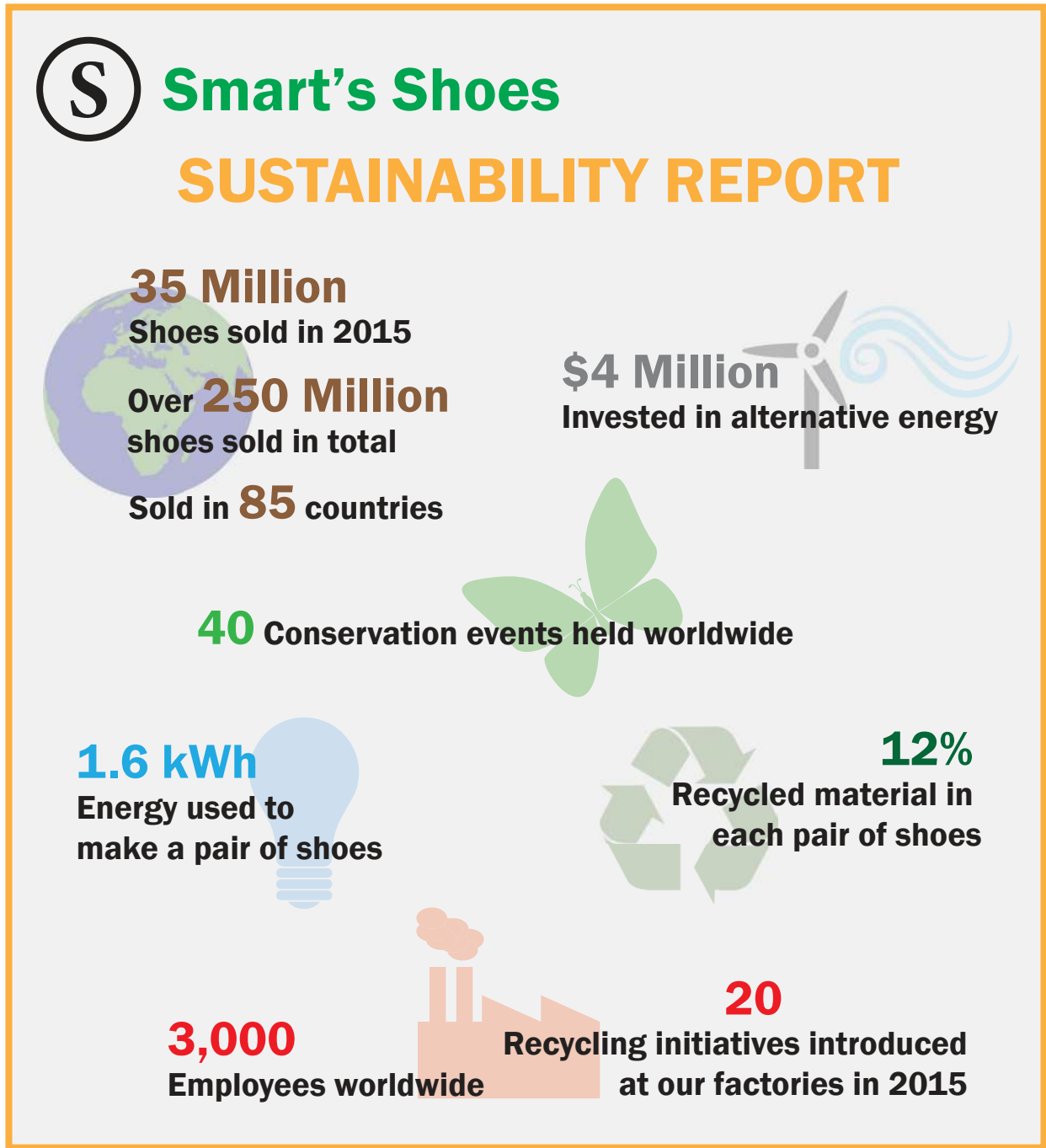
(This question continues on the following page)



16EP02

(Question 1 continued)

Figure 2: Infographic of a sustainability report



(This question continues on the following page)



16EP03

Turn over

(Question 1 continued)

- (a) List **two** ways that Quality Assurance (QA) contributes to quality management. [2]

.....

.....

.....

.....

- (b) Outline how decoupling contributes to Smart's Shoes sustainable policies and practices. [2]

.....

.....

.....

.....

.....

.....

- (c) Outline **one** reason why Smart's Shoes would use lean production to help meet their sustainability goals. [2]

.....

.....

.....

.....

.....

.....

(This question continues on the following page)



(Question 1 continued)

(d) Explain the benefits of sustainability reporting for manufacturers such as Smart's Shoes. [4]

.....

.....

.....

.....

.....

.....

.....

.....

.....

.....

.....

.....

.....

.....

.....

.....

.....

.....

.....

.....

.....

.....



16EP05

Turn over

Please **do not** write on this page.

Answers written on this page
will not be marked.



16EP06

- 2. Sir James Dyson is a British inventor and innovator, industrial designer and founder of Dyson Ltd. He is best known as the inventor of the Dual Cyclone bagless vacuum cleaner.

Dyson's products are on average 30% more expensive than similar products.

James Dyson says his products change the user experience because they perform better than competing products.

Dyson's innovations have also influenced other companies who sell in the same market. **Figure 3** shows the Samsung Powerstick which was based on the Dyson V7, see **Figure 4**.

Figure 3

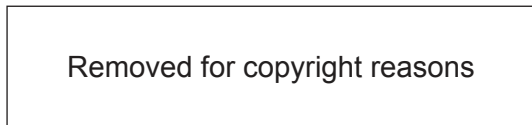


Figure 4



- (a) Outline **one** reason why Dyson Ltd would use computer integrated manufacturing (CIM). [2]

.....

.....

.....

.....

.....

.....

(This question continues on the following page)



(Question 2 continued)

- (b) Outline **one** reason why some consumers purchase Dyson products even though they are on average 30% more expensive than their competitors.

[2]

.....

.....

.....

.....

.....

.....

- (c) Outline **one** reason why Dyson's competitors have adopted an imitative strategy in the development of their products.

[2]

.....

.....

.....

.....

.....

.....

(This question continues on the following page)



Section B


Read the case study. Answer the following question. Answers must be written within the answer boxes provided.

3. Clinattec, a French biomedical research centre, and the University of Grenoble have recently developed a device. This has enabled a patient, known as Thibault, to move all four of his paralysed limbs with a mind-controlled exoskeleton, see **Figure 5**.

Thibault had to undergo months of training before using the robotic exoskeleton. The training was performed in a usability lab, using his brain signals to control an avatar in a computer simulation.

The designers at Clinattec used a range of user-centred design (UCD) strategies in the development of the exoskeleton. This enabled them to gain a complete understanding of the needs of the users, tasks and environments, see **Figure 6** and **Figure 7**. The trial was considered a success by scientists.

Figure 5: Thibault walks using the exoskeleton



(This question continues on the following page)



16EP10

(Question 3 continued)

Figure 6: A model showing the implant on Thibault's brain

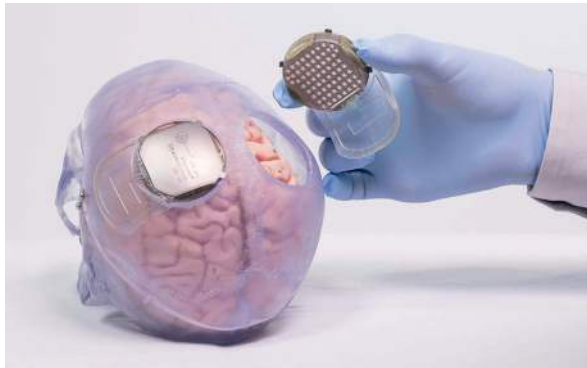


Figure 7: A multidisciplinary team of experts working with Thibault



(a) Outline **one** advantage of testing the exoskeleton in a usability lab.

[2]

.....

.....

.....

.....

.....

.....

(b) Outline **one** reason why learnability is an important usability objective.

[2]

.....

.....

.....

.....

.....

.....

(This question continues on the following page)



16EP11

Turn over

References:

Figure 5 © J. Treillet/FDD CEA Clinatec.

Figure 6 © La Brèche/CEA Clinatec.

Figure 7 © J. Treillet/FDD CEA Clinatec.

All other texts, graphics and illustrations © International Baccalaureate Organization 2021



16EP14

Please **do not** write on this page.

Answers written on this page
will not be marked.



16EP15

Please **do not** write on this page.

Answers written on this page
will not be marked.



16EP16